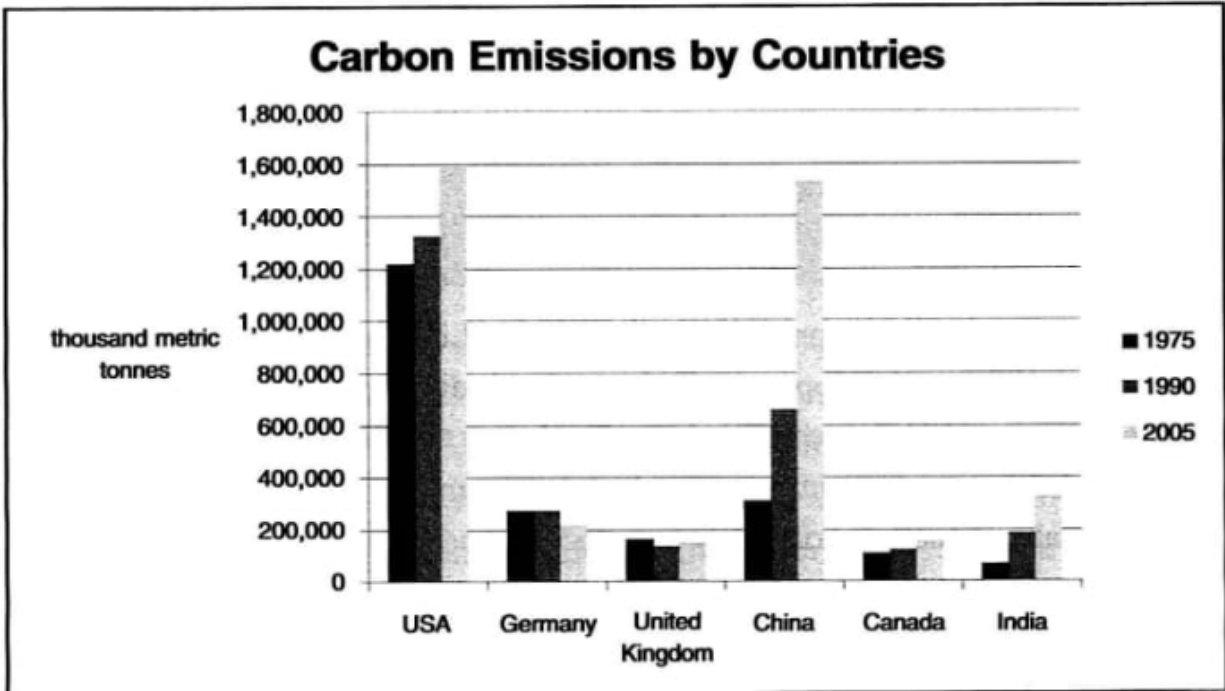
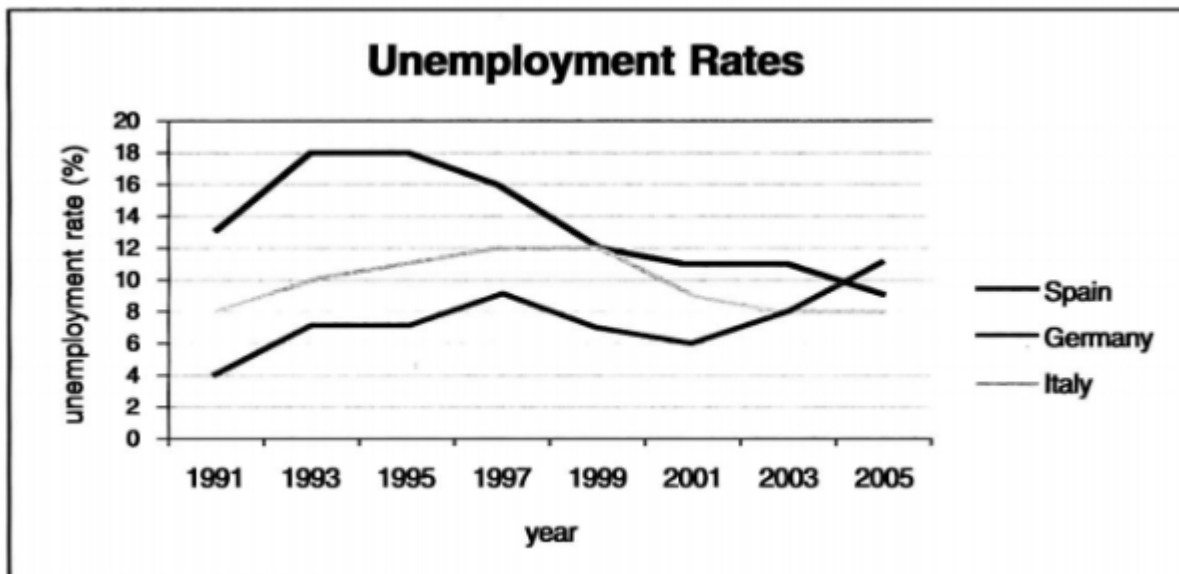


Question 1: Bar graph below shows the amount of carbon emissions in different countries during three different years. Summarise the information by selecting and reporting the main features, and make comparisons where relevant.



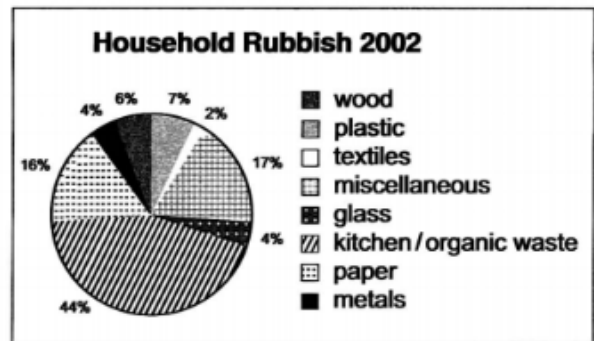
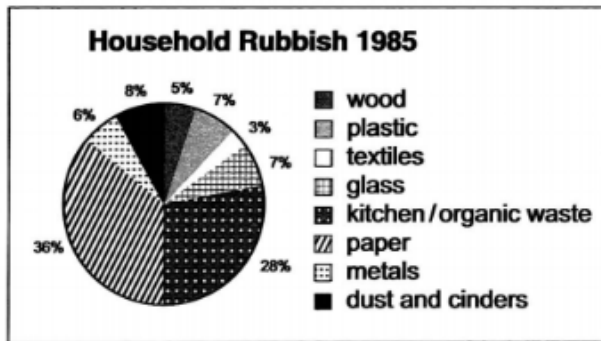
Question 2: The line graph below gives information about the rates of unemployment between 1991 and 2005 in three different countries in Europe. The table shows the percentage of men and women in the workforce in these three countries. Summarise the information by selecting and reporting the main features, and make comparisons where relevant.



Employment rates of men and women in three countries in Europe in 1991

Country	Men	Women
Germany	76.5%	54.4%
Spain	66.2%	32.3%
Italy	77.1%	37.8%

Question 3: The pie charts below give information about the composition of household rubbish in the United Kingdom in two different years. Summarise the information by selecting and reporting the main features, and make comparisons where relevant.



Question 4: The table below gives information about past and projected population figures in various countries for different years. Summarise the information by selecting and reporting the main features, and make comparisons where relevant.

Population (in millions)					
Country	1990	1993	2000	2020	2050
Australia	17.1	17.7	19.2	22.7	26.0

Canada	26.6	28.5	31.0	36.9	39.0
New Zealand	3.4	3.5	3.8	4.3	4.7
United States	249.9	258.2	275.1	320.6	349.0

Question 5: New technologies have changed the way children spend their free time. Do you think the advantages outweigh the disadvantages

**Question 6: Most countries believe that international tourism has harmful effects. What problems are caused by international tourism? Solutions to change negative attitudes?
OR**

Many people believe that international tourism is a bad thing for their country. Why do they think so? What can be done to change their views?

Question 7: Some people think that a huge amount of time and money is spent on the protection of wild animals and that this money could be better spent on the human population. To what extent do you agree or disagree with this opinion?

Question 8: You should spend about 20 minutes on this task.

The diagram below shows how leather goods are produced. Summarise the information by selecting and reporting the main features, and making comparisons where relevant. Write atleast 150 words.

A method of producing leather goods

